

Name: _____

Class: _____

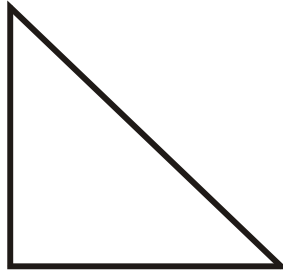
Geometry

Identify the polygons.

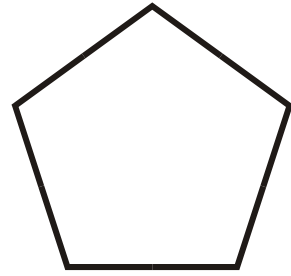
1.



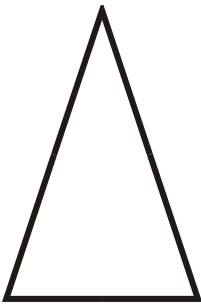
2.



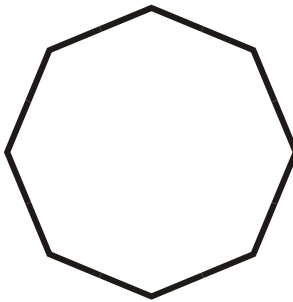
3.




4.



5.




6.



7.



8.



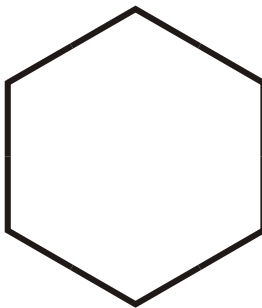
9.



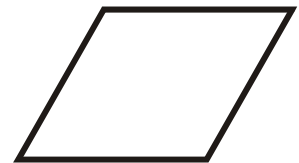
10.



11.



12.



Name: _____

Class: _____

Geometry

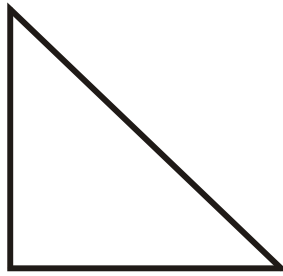
Identify the polygons.

1.



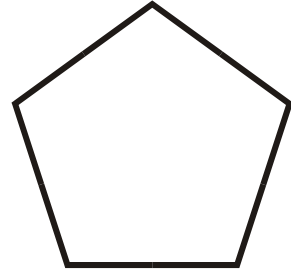
Rectangle

2.



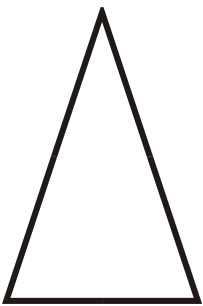
Right Triangle

3.



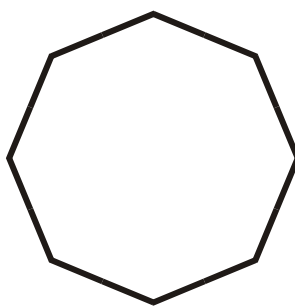
Regular Pentagon

4.



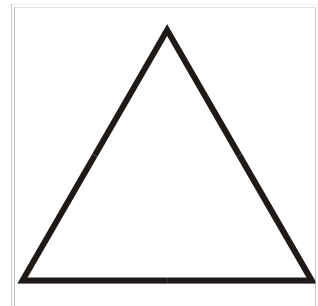
Isosceles Triangle

5.



Regular Octagon

6.




Equilateral Triangle

7.



Parallelogram

8.



Square

9.



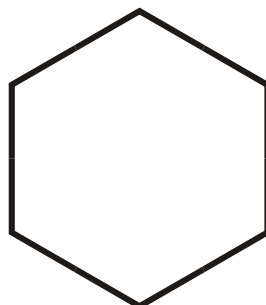
Trapezoid

10.



Scalene Triangle

11.



Regular Hexagon

12.



Rhombus